


10-3-2006

Wind Movement

Nate Ruder

The College at Brockport

Follow this and additional works at: http://digitalcommons.brockport.edu/cmst_lessonplans

 Part of the [Physical Sciences and Mathematics Commons](#), and the [Science and Mathematics Education Commons](#)


Repository Citation

Ruder, Nate, "Wind Movement" (2006). *Lesson Plans*. 272.

http://digitalcommons.brockport.edu/cmst_lessonplans/272

This Lesson Plan is brought to you for free and open access by the CMST Institute at Digital Commons @Brockport. It has been accepted for inclusion in Lesson Plans by an authorized administrator of Digital Commons @Brockport. For more information, please contact kmyers@brockport.edu.

Wind moves from High to Low
or Low to High Air Pressure?

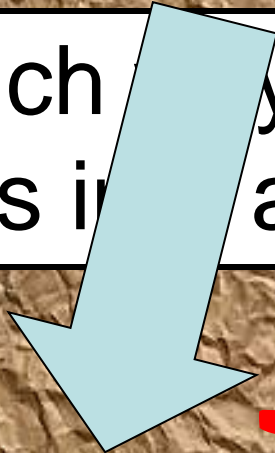




BUT, will the wind have a straight
path between High and Low?

Why or Why Not?

Which way will Air rotate, as it rushes in to a Low Pressure area?

L



Which way will Air rotate, as it rushes away from High Pressure area?

